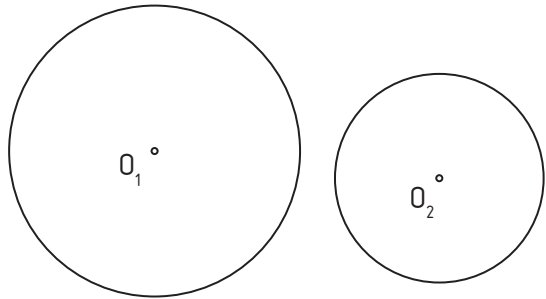
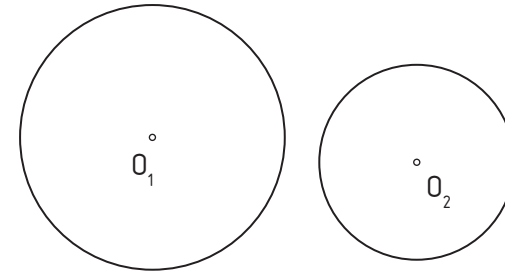


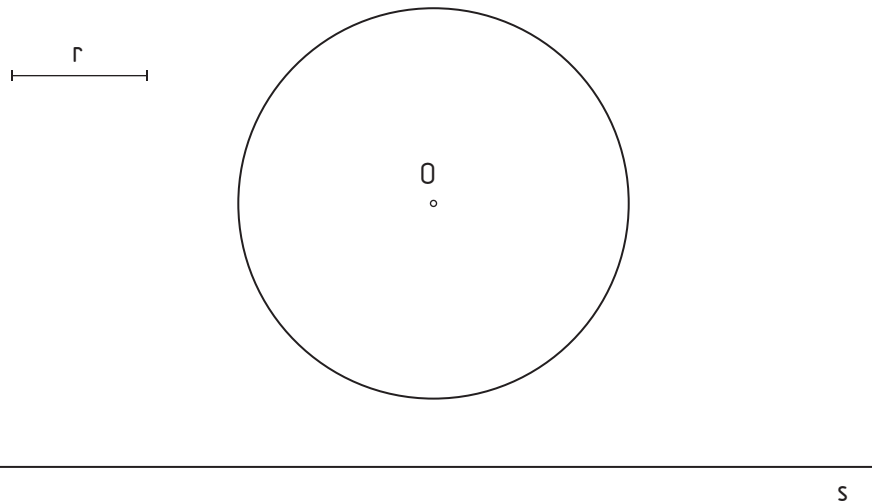
1.- Draw a circumference with radius **20 mm**, external tangent to given circumferences.



2.- Given circumferences are internally tangent to another with radius **50 mm**, find this circumference.



3.- Trace the circumferences with radius **r**, tangent to line **s** and circumference **O**.



4.- Find the tangent circumferences to line **r** and circumference **O** on **T** dot.

