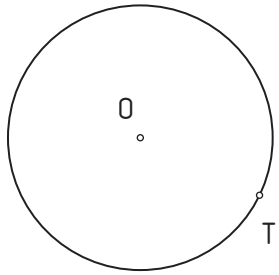



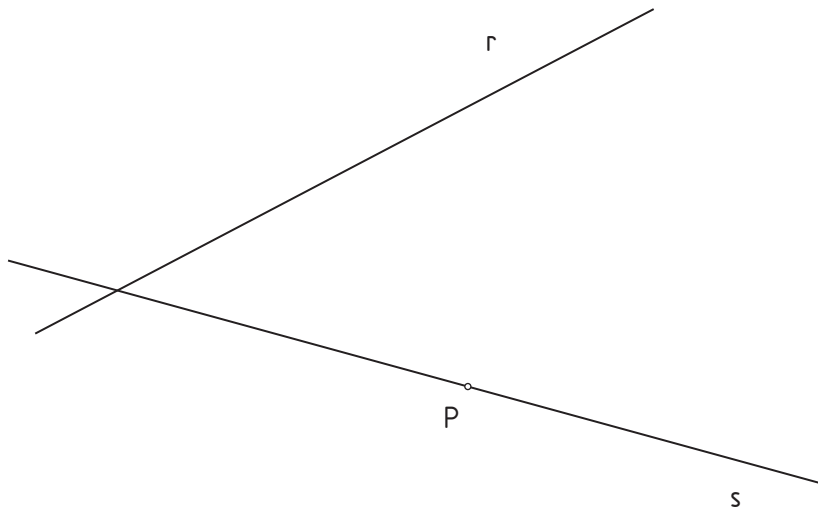
1.- Find the circumference tangent to given circumference **O** on **T** dot, that go through dot **P**.



2.- Draw the circumference that passes through **A**, **B** and **C** dots.



3.- Trace the tangent circumference to **r** and **s** lines. **P** is one of the tangency dots.



4.- Draw the circumference with **radius r**, tangent to given lines **s** and **t**.

