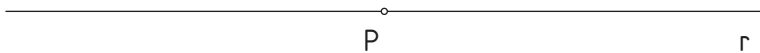
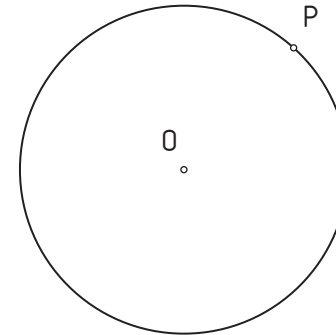



1.- Draw a circumference tangent to line **r** on dot **P** with a radius of **30 mm**.



2.- Trace a tangent line to circumference **O** on **P** dot.



3.- Find the circumferences with radius **25 mm**. tangent to line **r** that go through **P** dot.



4.- Trace the circumference with radius **30 mm**. tangent to circumference **O** on **P** dot.

