
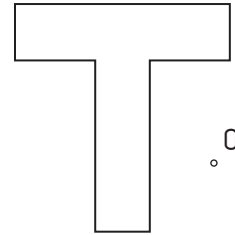


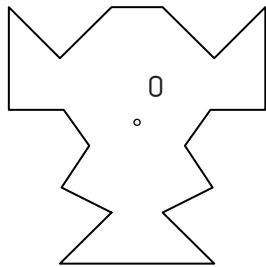
1.- With given similarity center **O**, draw similar figure with **ratio 3/5**.



2.- With given similarity center **O**, draw similar figure with **ratio -2**.



3.- With given similarity center **O**, draw similar figure with **ratio 2**.



4.- Given **ABC** triangle, draw an inscribed square with a side on **AB** side, a vertex on **BC** and another vertex on **AC** side.

