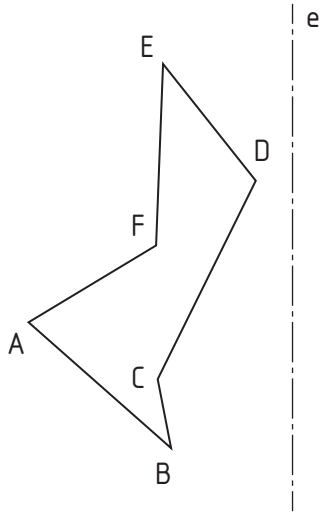
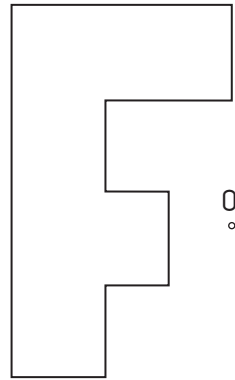


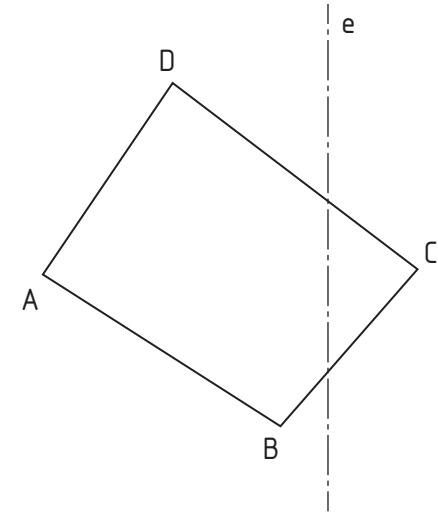
1.- Determine the symmetric figure of the given one according to **axis e**.



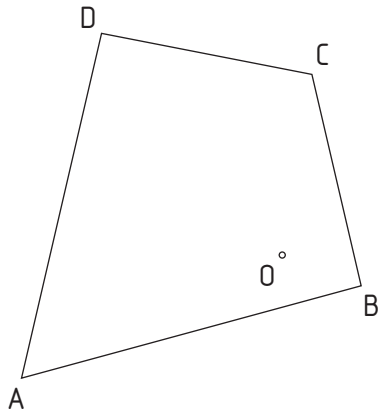
2.- Determine the symmetric figure of the given one according to **center O**.



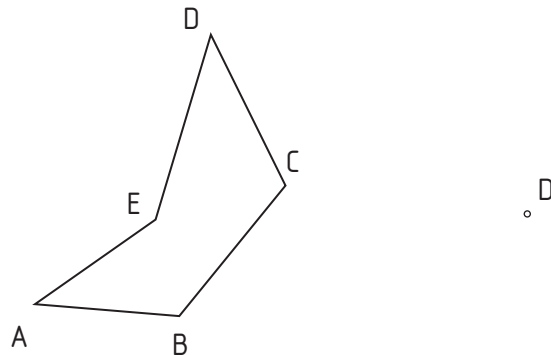
3.- Trace the symmetric quadrilateral of the given one according to **axis e**.



4.- Trace the symmetric quadrilateral of the given one according to **center O**.



5.- **D** and **D'** dots are symmetric. Find **symmetry axis** and draw the resulting figure.



6.- **D** and **D'** dots are symmetric. Find **symmetry center** and draw the resulting figure.

