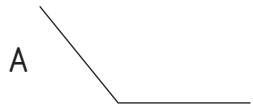

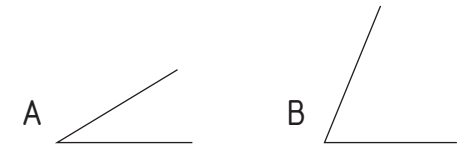


1.- Move **A** angle to **A** dot, on **r** line.



2.- On **P** dot, indicate the resulting angle of **A** and **B** angle addition: **A + B**.



3.- On **P** dot, line **r**, indicate the resulting angle of **A** and **B** angle subtraction: **A - B**.



4.- On **P** dot, line **r**, indicate the resulting angle for the following operation: **A + B - C**.

