
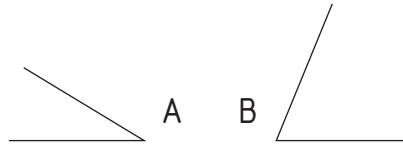


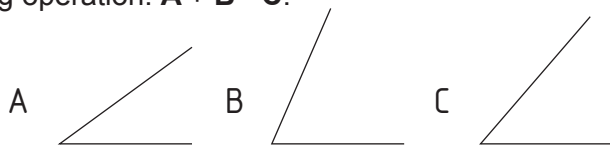
1.- Taking **P** dot on **r** as the vertex, indicate the resulting angle for the angle addition: **A + B**.



2.- Taking **P** dot on **r** as the vertex, indicate the resulting angle for the angle subtraction: **A - B**.



3.- Taking **P** dot on **r** as the vertex, indicate the resulting angle for the following operation: **A + B - C**.



4.- Draw the angle bisector of the given angle.

